

--	--	--	--	--	--	--	--

आर-शीट क्रमंक / OMR Answer Sheet No.

--	--	--	--	--	--	--	--

घोषणा : / Declaration :

मैंने पृष्ठ संख्या 1 पर दिये गये निर्देशों को पढ़कर समझ लिया है।

I have read and understood the instructions given on page No. 1.

परीक्षी केन्द्राध्यक्ष की सील

Seal of Superintendent of Examination Centre

परीक्षार्थी के हस्ताक्षर / Signature of Candidate
(आवेदन पत्र के अनुसूचक / as signed in application)

कक्षा निरीक्षक के हस्ताक्षर / Signature of the Invigilator

परीक्षार्थी का नाम /

Name of Candidate :

पुस्तिका में प्रश्नों की संख्या
No. of Pages in Booklet including title

16

समय 2 घंटे
Time 2 Hoursअंक / Marks
400पुस्तिका में प्रश्नों की संख्या
No. of Questions in Booklet

100

परीक्षार्थियों के लिए निर्देश / INSTRUCTIONS TO CANDIDATES

परीक्षार्थी को दिये गये पैमानक की चकत्त तय की हस्तलिपि में सचे दिये गये तिकत तयान पर गकल (कॉपी) करनी है।
"आप सही व्यवसाय में हैं, यह आप सभी जानेंगे जब : आप काम पर जाने के लिए चिंतित हैं, आप तित्व अपना काम सबसे अच्छा करना चाहते हैं, और आप अपने कार्य के महत्त्व को समझते हैं।"

अथवा / OR

To be copied by the candidate in your own handwriting in the space given below for this purpose is compulsory.
"You will know you are in the right profession when : you wake anxious to go to work, you want to do your best daily, and you know your work is important."

SEAL

अभ्यर्थियों हेतु आवश्यक निर्देश :

Instructions for the Candidate :

1	ओ. एम. आर. उत्तर पुस्तिका में गोलों तथा सभी प्रश्नियों को भरने के लिए कृपया नीचे या ऊपर बाल चाइट पेन का ही उपयोग करें।	1	Use BLUE or BLACK BALL POINT PEN only for all entries and for filling the bubbles in the OMR Answer Sheet.
2	SECURITY SEAL खोलने के पहले अभ्यर्थी अपना नाम, अनुक्रमंक (अंकों में) ओ. एम. आर. उत्तर-शीट का क्रमांक इस प्रश्न-पुस्तिका के ऊपर दिये गये स्थान पर लिखें। यदि वे इस निर्देश का पालन नहीं करते तो उनकी उत्तर-शीट का नूतपाकन नहीं हो सकता तथा ऐसे अभ्यर्थी अयोग्य घोषित हो जायेंगे।	2	Before opening the SECURITY SEAL of the question booklet, write your Name, Roll Number (in figures), OMR Answer-sheet Number in the space provided at the top of the Question Booklet. Non-compliance of these instructions would mean that the Answer Sheet can not be evaluated leading the disqualification of the candidate.
3	प्रत्येक प्रश्न चार अंकों का है। जिस प्रश्न का उत्तर नहीं दिया गया है, उस पर कोई अंक नहीं दिया जायेगा। गलत उत्तर पर अंक नहीं काटा जाएगा।	3	Each question carries FOUR marks. No marks will be awarded for unattempted questions. There is no negative marking on wrong answer.
4	सभी बहुविकल्पीय प्रश्नों में एक ही विकल्प सही है, जिस पर अंक देव होगा।	4	Each multiple choice question has only one correct answer and marks shall be awarded for correct answer.
5	गणक, लॉग टेबिल, मोबाइल फोन, इलैक्ट्रॉनिक उपकरण तथा ल्साइड ल्सा आदि का प्रयोग वर्जित है।	5	Use of calculator, log tables, mobile phones, any electronic gadget and slide rule etc. is strictly prohibited.
6	अभ्यर्थी को परीक्षा कक्ष छोड़ने की अनुमति परीक्षा अवधि की समाप्ति पर ही दी जायेगी।	6	Candidate will be allowed to leave the examination hall at the end of examination time period only.
7	यदि किसी अभ्यर्थी के पास पुस्तकें या अन्य लिखित या छोपी सामग्री, जिससे वे सहायता ले सकते / सकती हैं, पायी जायेगी, तो उसे अयोग्य घोषित कर दिया जा सकता है। इसी प्रकार, यदि कोई अभ्यर्थी किसी भी प्रकार की सहायता किसी भी ढंग से देता या लेता (या देने का या लेने का प्रयास करता) हुआ पाया जायेगा, तो उसे भी अयोग्य घोषित किया जा सकता है।	7	If a candidate is found in possession of books or any other printed or written material from which he/she might derive assistance, he/she is liable to be treated as disqualified. Similarly, if a candidate is found giving or obtaining (or attempting to give or obtain) assistance from any source, he/she is liable to be disqualified.
8	किसी भी ढंग की दशा में प्रश्न-पुस्तिका के अंग्रेजी अंश की ही नही व अंतिम माना जायेगा।	8	English version of question paper is to be considered as authentic and final to resolve any ambiguity.

1 IF TEMPLE is coded as VHQRLL,
how would you code CHURCH?

- (A) EKYWIO (B) EKUWIO
- (C) EKYWIN (D) EKYWJO

2 Find the odd one out.

- (A) Apple (B) Banana
- (C) Cucumber (D) Papaya

3 Find the odd one out from the series
3, 5, 11, 14, 17, 21

- (A) 3 (B) 5
- (C) 14 (D) 21

4 Find the odd one out from the series
10, 25, 45, 54, 60, 75, 80

- (A) 45 (B) 75
- (C) 54 (D) 80

5 Find the odd one out from the series
6, 9, 15, 21, 24, 28, 30

- (A) 6 (B) 9
- (C) 15 (D) 24

6 Find the odd one out from the series
835, 734, 642, 741, 853, 981, 532

- (A) 751 (B) 642
- (C) 853 (D) 981

7 Rajesh starting from his house, goes
5 km in the east, then he turns to his left
and goes 4 km. Finally he turns to his
left and goes 5 km. How far is he from
his house and in what direction?

- (A) 4 km from his house and in the
north direction
- (B) 4 km from his house and in the
south direction
- (C) 3 km from his house and in the
north direction
- (D) 3 km from his house and in the
south direction

8 A girl introduced a boy and said, "He is
the son of the daughter of the father of
my uncle". How is the boy related to the
girl ?

- (A) Brother (B) Nephew
- (C) Uncle (D) Son-in-law

OUR ANSWER SHEET



OUR ANSWER SHEET

1100662


Quantity of copies

if a candidate reports
in the SACCOO's Office
will be provided

BY THE UNIVERSITY

Roll No.

Use Blue or Black Ball Point Pen Only



Subject

- PHYSICS PHYSICS
- CHEMISTRY CHEMISTRY
- BIOLOGY BIOLOGY
- MATHEMATICS MATHEMATICS

BARCODE

Candidate


FACSIMILE

Verify that the entries in the above
instructions match the Question Booklet
and Answer Sheet.

Signature of Candidate

Certified that the entries above
of Question Booklet Serial No.
Roll No. & Subject are checked
found to be correct.

Signature of Investigator



Do not write your Name or Roll No. on this half of the sheet. Mark your Answers by blackening the appropriate bubbles, with Blue or Black Ball Point Pen only. Do not use Pencil.

1 2 3 4 5 6 7 8 9 10 11 12 13 14 15 16 17 18 19 20 21 22 23 24 25 26 27 28 29 30 31 32 33 34 35 36 37 38 39 40 41 42 43 44 45 46 47 48 49 50 51 52 53 54 55 56 57 58 59 60 61 62 63 64 65 66 67 68 69 70 71 72 73 74 75 76 77 78 79 80 81 82 83 84 85 86 87 88 89 90 91 92 93 94 95 96 97 98 99 100

Q. No. 1

Q. No. 2

Q. No. 3

Q. No. 4

Q. No. 5

Q. No. 6

Q. No. 7

Q. No. 8

Q. No. 9

Q. No. 10

Q. No. 11

Q. No. 12

3. Bar code sheet must be filled with correct bubble marks according to the instructions of Subject Office as per corresponding space provided for.

4. DO NOT scribble, scratch, cut, tear, fold, write or mark anything on the OMR Answer Sheet.
5. The Questions are of Multiple Choice type. Out of the four or five options, only one is the appropriate. Darken the circle corresponding to the most appropriate answer using only an HB pencil using Blue/Black ball point pen only.

Example :

Q. No. 1 : The capital of India is

- A. New Delhi
- B. Kolkata
- C. Chennai
- D. Mumbai

Correct Answer : B A C D

Wrong Answer : A B C D

6. Answer sheet will be processed electronically. Invalidation of answers due to incompletion of filling will be sole responsibility of the candidate.

7. Each Question carries four marks. The marks would be awarded only for correct answer. Marks would be awarded for wrong & unattempted answers. Incorrect method of filling will lead to invalidation of answer for which candidate will be solely responsible.

8. Bar Code printed on the Answer Sheet must not be tampered with or in any way, which may cause the candidature will be rejected.

9. Use of calculator, log table, slide rule and communication devices such as mobile phone, pager etc. is completely prohibited.

10. The above instructions must be strictly followed. Any violation or deviation may lead to cancellation of candidature. Further, for cancellation of candidature before or after admission due to incorrect/incomplete/true fraudulent entries candidate shall be held responsible.

9 The following question has a main statement from which logical conclusions follow. Select the right conclusion from the options given below :

Statements : In a one day cricket match, the total runs made by a team were 200. Out of these, 160 runs were made by spinners.

Conclusion : (I) 80% of the team consists of spinners

(II) The opening batsmen were spinners

- (A) Only I follows
- (B) Only II follows
- (C) Neither I nor II follows
- (D) Both I and II follows

10 The following question has a main statement, followed by four statements labelled A, B, C and D. Choose the correct option from which the pair of statements are logically consistent with the main statement.

Statement : You can find goods made in the USA only in the United States.

- (A) I did not find goods made in the USA
- (B) I found goods made in the USA
- (C) I went to USA
- (D) I did not go to USA

Directions for Questions 11-12 : In each of the questions given below, there is a sentence of which some parts have been jumbled up. Choose the proper sequence of arrangement from the given options.

11 He was so kind and generous that

P : He not only

Q : made others do so

R : but also

S : helped them himself

The correct option would be :

- (A) P S R Q (B) S P Q R
- (C) R Q P S (D) Q P R S

12 He said :

P : Here is the cat

Q : throughout the night

R : which played havoc with things

S : ate the rat

The correct option would be :

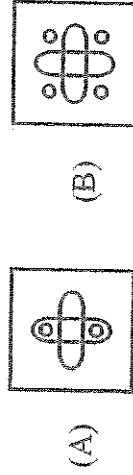

- (A) P S R Q (B) S R P Q
- (C) R Q P S (D) P R Q S

- 13 Pointing to Madhav, Varman said, "I am the only son of the sons of his father". How is Madhav related to Varman ?
(A) Nephew
(B) Uncle
(C) Father or Uncle
(D) Father
- 14 Which of the following word appears third in the dictionary ?
(A) Cambodian
(B) Caliper
(C) Cake
(D) Cackle
- 15 In a certain code, a number 13479 is written as AQJFJL and 5268 is written as DMPN. How is 396824 written in that code ?
(A) QLPNKJ
(B) QLPNMF
(C) QLPMNF
(D) QLPNDF
- 16 On which of the following day is United Nations World Water Day celebrated ?
(A) January 28
(B) September 05
(C) February 28
(D) March 22
- 17 Which of the following team has won the ICC cricket world cup the maximum number of times?
(A) India
(B) Sri Lanka
(C) South Africa
(D) Pakistan
- 18 Where is the headquarters of ASEAN situated ?
(A) New York, USA
(B) Geneva, Switzerland
(C) South Jakarta, Indonesia
(D) Malaysia


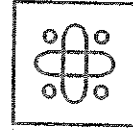
19 "Brief History of Time" is written by :

- (A) Stephen Hawking
- (B) Amitav Ghosh
- (C) Khushwant Singh
- (D) R. K. Narayan

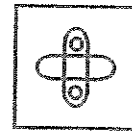
20 Select a suitable figure to complete the figure matrix :



(B)



(D)



21 Grand Central Terminal, Park Avenue, New York is which of the following ?

- (A) Largest Railway Station
- (B) Highest Railway Station
- (C) Longest Railway Station
- (D) None of these

22 The famous "Sun Temple" is located in :

- (A) Bihar
- (B) Orissa
- (C) Tamil Nadu
- (D) Andhra Pradesh

23 The famous "Golden Temple" is located in:

- (A) Ludhiana
- (B) Jalandhar
- (C) Kapurthala
- (D) Amritsar

24 Who is the Indian woman badminton player to became number one in the world?

- (A) Saina Nehwal
- (B) Aparna Popat
- (C) Madhumita Bisht
- (D) P. G. Sandhu

25 The famous leaning tower of Pisa is in :

- (A) France
- (B) England
- (C) Russia
- (D) Italy

26 The chief constituent of Gobar gas is :

- (A) Hydrogen
- (B) Methane
- (C) Gobrane
- (D) Carbon dioxide

27 Philology is the study of :

- (A) Bones
- (B) Muscles
- (C) Architecture
- (D) Languages

28 Who, among the following, was the last Governor General of India

- (A) Pandit Jawaharlal Nehru
- (B) S. Radhakrishnan
- (C) C. R. Rajagopalachari
- (D) Lokmanya Tilak

29 Amnesty International is :

- (A) An organisation dealing with human rights
- (B) An organisation for the upliftment of the poor and needy
- (C) An organisation for freedom of press
- (D) None of the above

- 30 In India, seats are reserved for women in
- (A) Lok Sabha
 - (B) State Legislative Assemblies
 - (C) Cabinets
 - (D) Panchayati Raj Bodies
- 31 The Elephanta caves found in Ellora are an example of
- (A) Buddhist Architecture
 - (B) Chola Architecture
 - (C) Pallava Architecture
 - (D) None of these
- 32 Washing Soda is the common name for?
- (A) Sodium Carbonate
 - (B) Calcium Carbonate
 - (C) Sodium Bicarbonate
 - (D) Calcium Bicarbonate
- 33 Graphite is :
- (A) a form of Carbon
 - (B) an alloy of Iron
 - (C) an alloy of Aluminium
 - (D) an alloy of Gallium
- 34 The name of Bismillah Khan is associated with
- (A) Flute
 - (B) Shehnai
 - (C) Sarod
 - (D) Tabla
- 35 The pink city of India is the capital of
- (A) Madhya Pradesh
 - (B) Rajasthan
 - (C) Andhra Pradesh
 - (D) Tamil Nadu

- 36 Wimbledon Trophy is associated with :
- (A) Football
 - (B) Tennis
 - (C) Cricket
 - (D) Hockey

37 The Wheel seen in the middle strip of the Indian National Flag has how many number of spokes ?

- (A) 24
- (B) 20
- (C) 48
- (D) 18

38 Sarnath is well known because of

- (A) Oil refineries
- (B) Holy place for buddhists
- (C) Ancient capital
- (D) Big steel plant

39 Name the smallest addressable set of bits of the computer memory.

- (A) Byte
- (B) Word
- (C) Pixel
- (D) Digit

40 Monarchy means

- (A) A form of government headed by a dynastic ruler
- (B) A person with the right to vote
- (C) A collector of stamps
- (D) A government by the rich

- 41 Which word is the antonym for the word "Rich" ?
(A) Poor (B) Famous
(C) Miserable (D) Full

- 42 The one word which is the synonym of the word "wet" :
(A) Rainy (B) Sunny
(C) Dry (D) Stormy

- 43 Insert the missing word in the following sentence :

_____ shall I say is calling?
(A) Whose (B) Who
(C) Who's (D) How

Choose the correct option to replace the italicised part of the incorrect sentence in the questions (Q.44 and Q.45) below :

- 44 The man to *who I sold* my house was a cheat
(A) whom I sell (B) who I sell
(C) who I sold to (D) whom I sold

- 45 There was no city so famous *like* the city of Ujjain.
(A) as (B) such as
(C) likewise (D) as like

Directions for Q.46 - Q.49 : Two words are given which have a certain relationship to each other. Select the pair which has the same relationship.

- 46 Light : Blind
(A) Speech : Mute
(B) Language : Deaf
(C) Speech : Dumb
(D) Voice : Vibration
- 47 Ten : Decimal
(A) Seven : Septet
(B) Four : Quartet
(C) Two : Binary
(D) Five : Quince
- 48 Gravity : Pull
(A) Iron : Metal
(B) Magnetism : Attraction
(C) Dust : Desert
(D) North Pole : Directions
- 49 Filter : Water
(A) Curtail : Activity
(B) Expunge : Book
(C) Edit : Text
(D) Censor : Play

- 50 Choose the sentence which has a grammatical error
 (A) If I had known
 (B) This yesterday
 (C) I will have helped him
 (D) I do this well
- 51 Choose the sentence which has a grammatical error.
 (A) One of the members
 (B) Expressed doubt if
 (C) The minister was an honest man
 (D) Disciplined students
- 54 Synonym of "Alert" ?
 (A) Energetic (B) Observant
 (C) Intelligent (D) Watchful
- 55 Synonym of "Moving" ?
 (A) Taking (B) Toying
 (C) Shifting (D) Turning
- 56 Antonym of " Artificial" ?
 (A) Red (B) Natural
 (C) Truthful (D) Solid
- 57 "To keep one's temper" means
 (A) To become too angry
 (B) To be in good mood
 (C) To be in bad mood
 (D) To be temporary

Select the correct spelling in Q. 52 and Q. 53:

- 52 (A) Pessenger
 (B) Passenger
 (C) Pasanger
 (D) Pesanger
- 53 (A) Faithfully
 (B) Truly
 (C) Sincerely
 (D) Affectionatly
- 58 "To drive home" means
 (A) To find out one's home address
 (B) To return home
 (C) Back to original
 (D) To emphasize
- 59 "Gift of the gab" means
 (A) Talent for speaking
 (B) Talent for writing
 (C) Talent for painting
 (D) None of the above

Directions for Q. 60 – Q. 61 : Pick out the most effective word(s) from the given options to fill in the blank to meaningfully complete the sentence.

- 60 I haven't eaten a mango _____ a long while.
(A) from (B) since
(C) for (D) until
- 61 Man must _____ to stop pollution.
(A) act (B) operate
(C) behave (D) perform

Directions for Q. 62 - Q. 63 : Fill in the two blank spaces in the sentence in the same sequence to make a meaningful sentence.

- 62 Do women _____ leadership differently than men do? And if so, will feminine leadership succeed where _____ leadership did not?
(A) undertake, authoritarian
(B) undertake, masculine
(C) undertake, traditional
(D) charismatic, undertake
- 63 Watermelons _____ to India by the 4th century A.D. Sushruta, the great Indian physician _____ wrote Sushruta Samhita explains the medicinal properties of watermelons.
(A) came, who (B) came, certainly
(C) arrived, when (D) arrived, whom

Directions for Q. 64 - Q. 65 : In each incomplete sentence given, choose the option which completes the sentence in a meaningful way.

- 64 I felt somewhat more relaxed
(A) but tense as compared to earlier
(B) and tense as compared to earlier
(C) as already there was no tension at all
(D) and tension free as compared to earlier
- 65 Despite his best efforts to conceal his anger
(A) we could make out that he was very happy
(B) he failed to give us an impression of his agony
(C) people came to know that he was annoyed
(D) he succeeded in camouflaging his emotions very easily
- 66 The ratio between the length and breadth of a rectangular park is 3:2. If a man cycling along the boundary of the park at the speed of 12 km/hr completes one round in 8 minutes, then the area of the park in sq.m is
(A) 15360 (B) 153600
(C) 30720 (D) 307200
- 67 What is the least number of square tiles required to pave the floor of a room 15m 17cm long and 9m 2cm broad ?
(A) 814 (B) 840
(C) 844 (D) 820

68 In the first ten overs of a cricket game, the run rate was only 3.2. What should be the run rate in the remaining 40 overs to reach the target of 282 runs?

- (A) 6.25 (B) 6.50
(C) 6.75 (D) 7.00

69 In a mixture of 60 litres, the ratio of milk and water is 2:1. If this ratio is to be 1:2, then the quantity of water to be further added is :

- (A) 20 litres (B) 30 litres
(C) 40 litres (D) 60 litres

70 A person crosses a 600 m long street in 5 minutes. What is his speed in km/hour?

- (A) 3.6 (B) 7.2
(C) 8.4 (D) 10

71 One km equals to

- (A) 10^5 cm (B) 10^4 cm
(C) 10^6 cm (D) None of these

72 A can do a piece of work in 4 hours, B and C together can do it in 3 hours, while A and C together can do it in 2 hours. How long will B alone take to do it?

- (A) 8 hours (B) 10 hours
(C) 12 hours (D) 24 hours

Please read the following and answer the Q. 73 - Q. 76 :

Marks secured by six number of students in various projects conducted during 2011-2012 session.

Group	Project no 1	Project no 2	Project no 3	Project no 4	Project no 5	Project no 6	Total Marks
P	60	64	62	66	63	68	383
Q	70	62	68	60	58	68	386
R	66	68	70	72	70	71	420
S	59	60	62	63	65	67	376
T	56	58	60	68	62	65	369
U	62	66	68	58	59	65	378

73 Which of the groups has shown a steady improvement throughout the session ?

- (A) P (B) Q
(C) R (D) S

74 The total marks secured by group S and Group T together was maximum in which project ?

- (A) 5 (B) 2
(C) 3 (D) 6

75 In how many projects did group R secure more than its average marks of the entire session ?

- (A) 1 (B) 3
(C) 2 (D) 4

76 Which group has minimum number of changes in marks of project no 6 compared to project no 1 ?

- (A) T (B) R
(C) S (D) Q

77 Two ships are sailing in the sea on the two sides of a lighthouse. The angle of elevation of the top of the lighthouse is observed from the ships are 30 degrees and 45 degrees respectively. If the lighthouse is 100 m high, the distance between the two ships is :

- (A) 173 m
- (B) 200 m
- (C) 273 m
- (D) 300 m

78 Which one of the following is not a prime number ?

- (A) 31
- (B) 61
- (C) 71
- (D) 91

79 What least number is to be added to 1056 so that the number is divisible by 23 ?

- (A) 2
- (B) 8
- (C) 18
- (D) None of these

80 A vendor bought toffees at 6 for a rupee. How many for a rupee must he sell to gain 20% ?

- (A) 3
- (B) 5
- (C) 4
- (D) 6

81 $\sqrt{0.4} + \sqrt{0.4}$ equals to

- (A) 12
- (B) 14
- (C) 16
- (D) None of these

82 Three times the first of three consecutive odd integers is 3 more than twice the third. The third integer is :

- (A) 9
- (B) 11
- (C) 13
- (D) 15

83 A fruit seller had some apples. He sells 40% apples and still has 420 apples. Originally he had :

- (A) 588 apples
- (B) 600 apples
- (C) 672 apples
- (D) 700 apples

84 In a box, there are 8 red, 7 blue and 6 green balls. One ball is picked up randomly. What is the probability that it is neither red nor green ?

- (A) 1/3
- (B) 3/4
- (C) 7/19
- (D) 8/21

- 85 5 pi by 6 equals to
(A) 130° (B) 140°
(C) 150° (D) 160°
- 86 In a flight of 600 km, an aircraft was slowed down due to bad weather. Its average speed for the trip was reduced by 200 km/hour and the time of flight increased by 20 minutes. The duration of the flight is :
(A) 1 hr (B) 2 hrs
(C) 3 hrs (D) 4 hrs
- 87 How many of the following numbers are divisible by 132 amongst the numbers 264, 396, 462, 792, 968, 2178, 5184, 6336 ?
(A) 4 (B) 6
(C) 5 (D) 7
- 88 During rainfall, 5 cm of rain falls. The volume of water that falls on 1.5 hectares of land is
(A) 75 cu.m (B) 750 cu.m
(C) 7500 cu.m (D) 75000 cu.m
- 89 A sum of money at simple interest rate of 10% in 5 years becomes 12000. The original sum was
(A) Rs. 8,000 (B) Rs. 9,000
(C) Rs. 10,000 (D) Rs. 11,000
- 90 Who is the CEO and MD of ICICI?
(A) Chanda Kochhar
(B) Indra Nooyi
(C) Sudha Murthy
(D) Azim Premji
- 91 Find the odd one out in the following arrangement of letters :
(A) CFE (B) JML
(C) UXW (D) SYW
- 92 In a local club all the members participated in either the mela only or the tambola only. 320 participate in the mela, 350 participate in the Tambola and 220 participate in both. How many members does the club have ?
(A) 410 (B) 550
(C) 450 (D) None of these

93 Pawan said "This girl is the sister of the grandson of my mother". How is this girl related to Pawan ?

- (A) Daughter
- (B) Niece
- (C) Sister
- (D) Cannot be determined

94 Sponge is to porous as Rubber is to :

- (A) Massive (B) Solid
- (C) Elastic (D) Inflexible

95 Look at the series 36, 34, 30, 28, 24, _____ what number comes next?

- (A) 20 (B) 22
- (C) 23 (D) 26

96 In the series 301, 303, 306, 310, _____, what number should come next ?

- (A) 313 (B) 314
- (C) 315 (D) 316

Directions for Q. 97 - Q. 99 : Choose the appropriate option that is a necessary part of the underlined word.

97 School

- (A) Student (B) Learning
- (C) Exam (D) Report Card

98 Pain

- (A) hurt (B) cut
- (C) nuisance (D) burn

99 Shoe

- (A) sole (B) laces
- (C) walking (D) leather

100 In a certain code language "ACCEPT" is written as "CBEDRS". How will "FRIEND" be written in that code?

- (A) HKQDCP (B) HQKDPC
- (C) HSORVD (D) HQRVDV

SPACE FOR ROUGH WORK / कच्चे काम के लिये जगह

SEAL
A/C
11/11

[11]

16

